


WISKUNDE GELETTERDHEID

GRAAD 10 – OPDRAG 6



NAAM: _____

VAN: _____

ONDERWYSER KRIPTO : BG / EdT

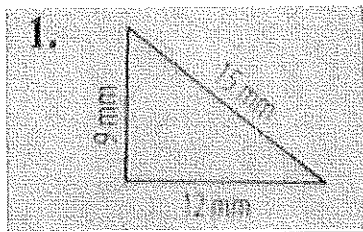
DATUM UITGEGEE: Woensdag 12 Augustus 2020

DATUM INGEE: Woensdag 19 Augustus 2020

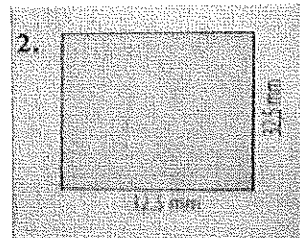
PUNTE 20

Vraag 1: Omtrek

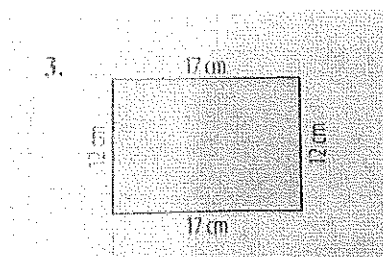
Gebruik die geskikte formules om die omtrek van elke vorm hieronder te bereken.



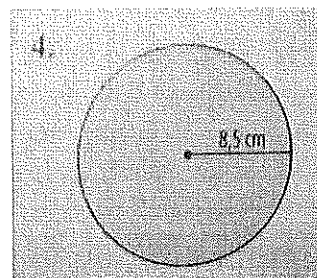
_____ (2)



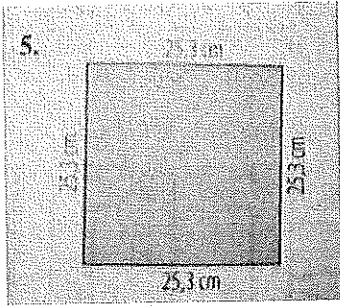
_____ (2)



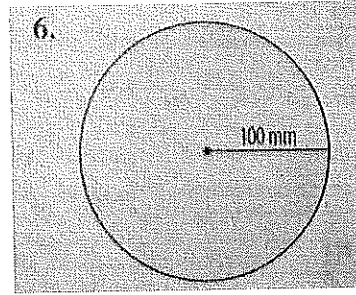
_____ (2)



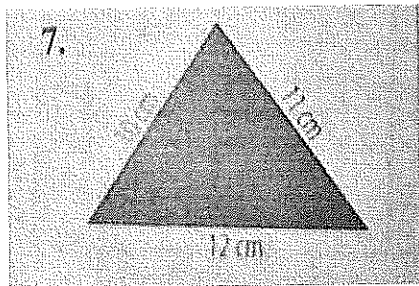
_____ (3)




_____ (3)



_____ (3)



_____ (3)



_____ (2)

TOTAAL : 20