

WISKUNDE GELETTERDHEID

GRAAD 10 – OPDRAG 6



NAAM: _____

VAN: _____

ONDERWYSER KRIPTO : BG / EdT

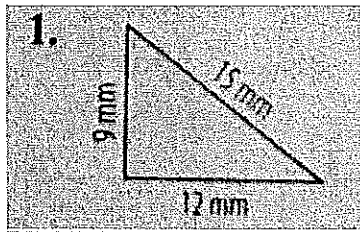
DATUM UITGEGEE: Woesndag 8 Julie 2020

DATUM INGEE: Woensdag 15 Julie 2020


PUNTE 20

Vraag 1: Omtrek

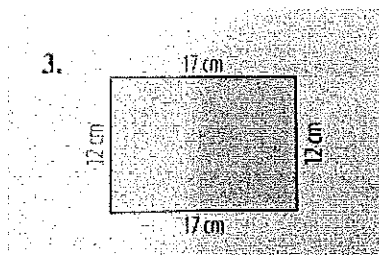
Gebruik die geskikte formules om die omtrek van elke vorm hieronder te bereken.



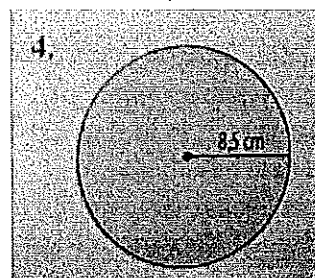
_____ (2)



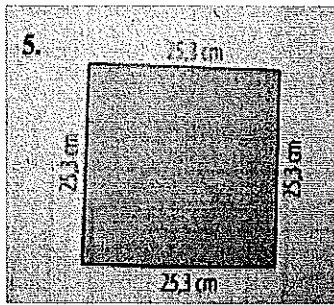
_____ (2)



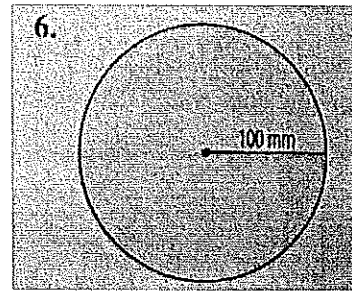
_____ (2)



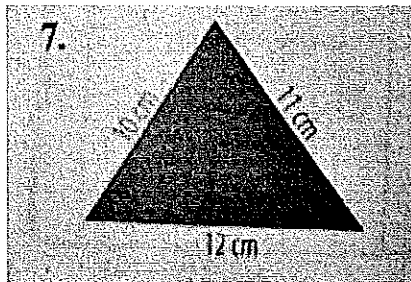
_____ (3)




(3)



(3)



(3)



(2)

TOTAAL : 20